




Name: \_\_\_\_\_

# Shapes and Counting Directions Example

Get 3




Get 2



Get 1



Get 1



Get 4



Get 2



How many pieces in all? \_\_\_\_\_

Name: \_\_\_\_\_




## Shapes and Counting Directions

Get \_\_\_\_\_




Get \_\_\_\_\_



Get \_\_\_\_\_



Get \_\_\_\_\_



Get \_\_\_\_\_



Get \_\_\_\_\_



How many pieces in all? \_\_\_\_\_