







Name: _____



1 2 3 4 5 6 7 8 9 10


How many Tys in all?


1.  +  = _____

2.  +  = _____

3.  = _____

4.  +  = _____

5.  + 1 = _____

6.  + 2 = _____

7. $2+2=$ _____

8. $3+2=$ _____