







Name: \_\_\_\_\_



1 2 3 4 5 6 7 8 9 10


How many Tys are left?


1.  -  = \_\_\_\_\_

2.  -  = \_\_\_\_\_

3.  -  = \_\_\_\_\_

4.  -  = \_\_\_\_\_

5.  - 1 = \_\_\_\_\_

6.  - 2 = \_\_\_\_\_

7.  $2 - 2 =$  \_\_\_\_\_

8.  $3 - 2 =$  \_\_\_\_\_